

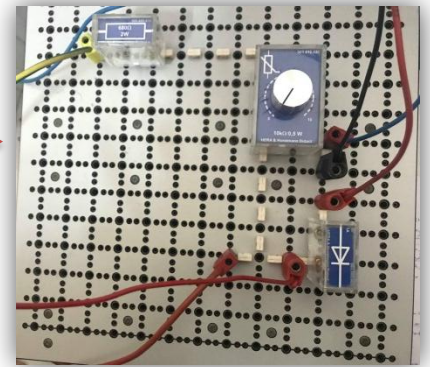
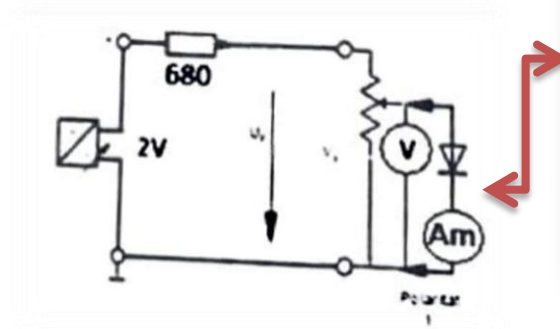
Introduction

1. We will experiment the effect of the P-N transition of a rectifier diode on the current flowing through it.
2. To investigate the current in a half wave rectifier circuit.
3. To study the bridge rectifier circuit

Part one(Effects of the P_N junction of diodes)

Procedure:


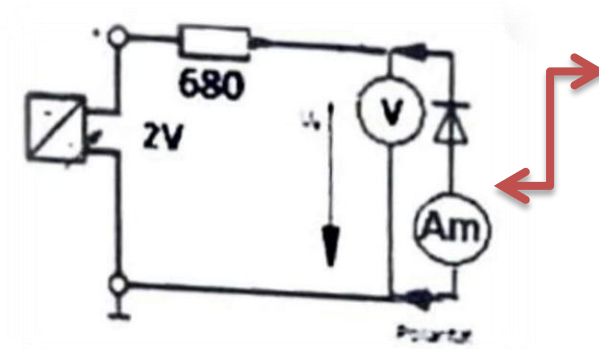
- 1-A(forward)
- We set up the circuit as shown.



- We set the voltage value to 2v before we connect the diode .
- We measure the value of the current through the diode while we change the value of the variable resistance.(see the attached table below)

Uf v	0	0.1	0.2	0.3	0.4	0.5	0.6	0.65	0.7	0.75
IF mA	0	0.01	0	0	0	0.14	1.09	2.11	4.46	7.02

- 1-B (Reverse)
- We change the polarity of the diode and we set the voltage directly at the power supply.
- We remove the variable resistance.

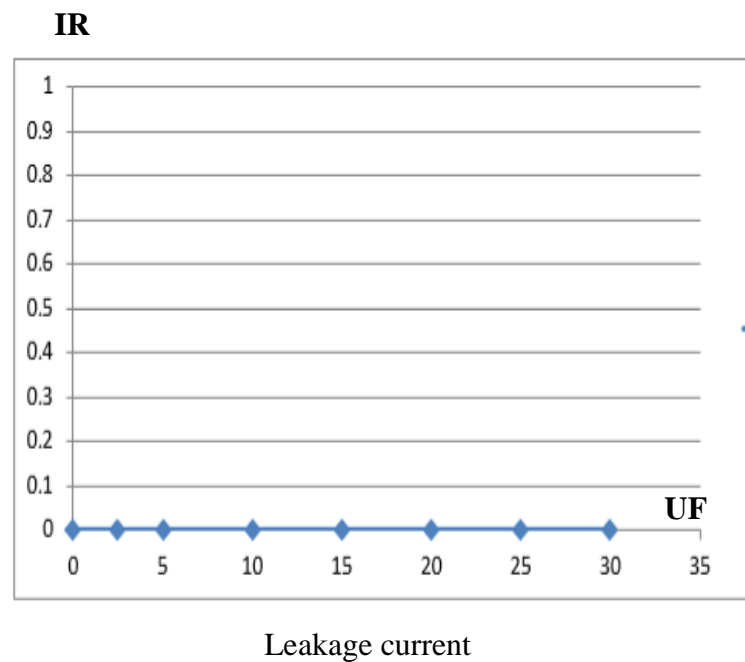
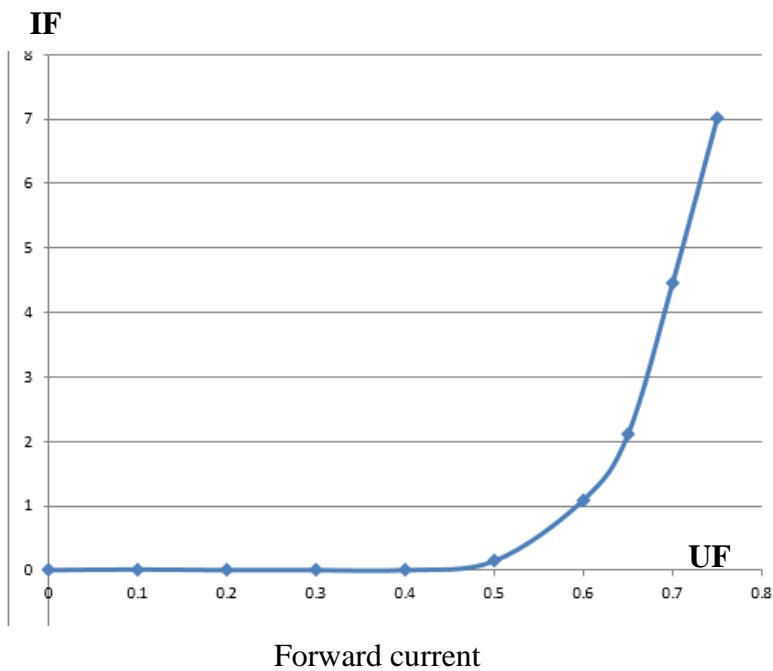


- We measure the current while we change the value of the voltage(see the attached table).

UR v	0	2.5	5	10	15	20	25	30
IR mA	0	0	0	0	0	0	0	0

Q1 what is the name of the voltage, when the diode gets conductive.


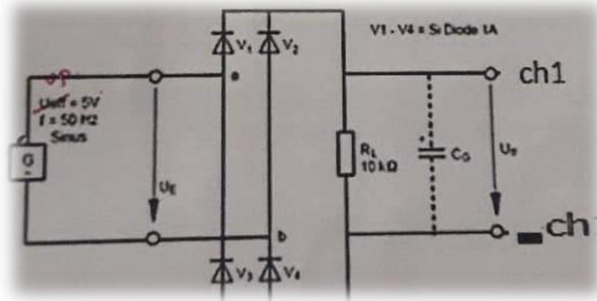
☒ Forward current.



Part three (Two-Pulse Bridge circuit –Bridge rectifier)

Procedure:

- We set up the circuit as shown.(without capacitor)



- We set the Ac voltage at 5 volt and 50 Hz
- We connected the oscilloscope and measure Vdc and vpp and the frequency.
- We connected the capacitors with (10 μ ,100 μ) and measure Vdc and vpp.

C	non	10 μ	100 μ
VAC	5 volt		
VDC	$1.68 \times 2 \sqrt{3.14} = 1.07\text{v}$	254.77 mv	$v_p = 0 \sqrt{3.14} = 0$
DC ratio = Vdc/Vac	0.21 v	50.95 mv	0
Vpp	4 volt	800 mv	200 mv
F(Hz)	100		

Notice and Qus.

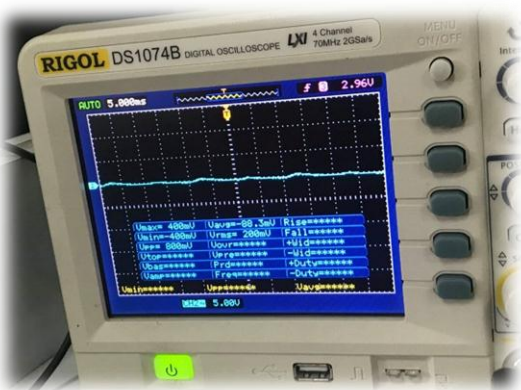
- V DC= 2 vp\3.14
- The value of Freq is doubled.

Q1

The ratio between Ud and UE = 0.21v

Q2

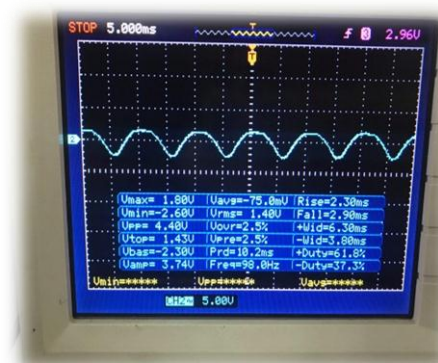
The frequency of the ripple vpp =100Hz



The signals when C=10 μ



The signals when C=100 μ



The signals Without capacitor